

WELCOME BACK

TANGY TUESDAY PUZZLE PACK!

Fun brain puzzles that make you smarter!

GRADE
2

PACK 1
tangmath.com

WEEK
1




DIGICROSS

TANGY TUESDAY PUZZLE PACK
2.1.1

Name: _____

tangmath.com © 2017-18 Greg Tang

Complete the crossword by filling in a word that fits each clue.



tens eighty nine less forty-two penny five shorter forty halves

ACROSS

- 11 + ____ = 16
- 2 ____ make a whole
- 30 + 10 + 2
- 458 = 4 hundreds + 5 ____ + 8 ones
- 1 ____ = \$.01

DOWN

- 325 is ____ than 335
- 782 = 700 + ____ + 2
- 1 inch is ____ than 1 yard
- 342 = 300 + ____ + 2
- 13 - 4

SNAKE

TANGY TUESDAY PUZZLE PACK
2.1.1

Name: _____

tangmath.com © 2017-18 Greg Tang

Fill in each blank box in order, combining the numbers from the previous two boxes.

10	-5		+6		-2		+6	
----	----	--	----	--	----	--	----	--

								+14
--	--	--	--	--	--	--	--	-----

	-16		+4		+9		-21	
--	-----	--	----	--	----	--	-----	--

+17								
-----	--	--	--	--	--	--	--	--

	+8		-22		+16		-3	21
--	----	--	-----	--	-----	--	----	----

19	-8	
----	----	--

		+7
--	--	----

	-5	
--	----	--

-7		
----	--	--

	+24		-23	
--	-----	--	-----	--

	+22		+1	
--	-----	--	----	--

-20				-23
-----	--	--	--	-----

	+24	
--	-----	--

-4		
----	--	--

	-11	11
--	-----	----


NUMTANGA


TANGY TUESDAY PUZZLE PACK
2.1.1


Name: _____


tangmath.com © 2017-18 Greg Tang


In each empty box, write the matching value between adjacent cards.


13	20+8
	fourteen


12	10+4
	nineteen


29	10+3
	seventeen


19	20+1
	eighteen

16	10+7
	twenty eight

28	10+9
	fifteen

21	20+4
	twenty nine

24	10+6
	thirteen

11	10+2
	twenty one

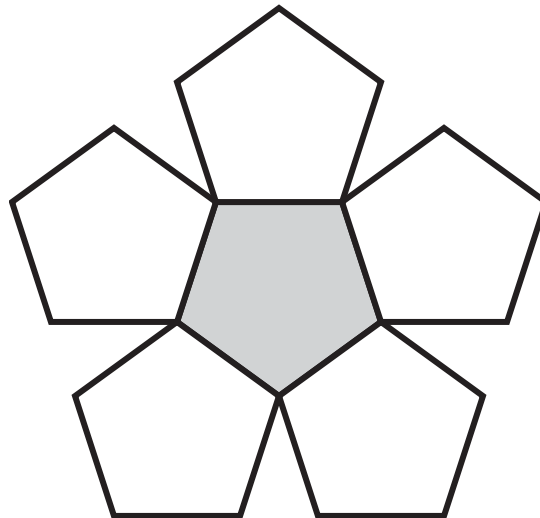
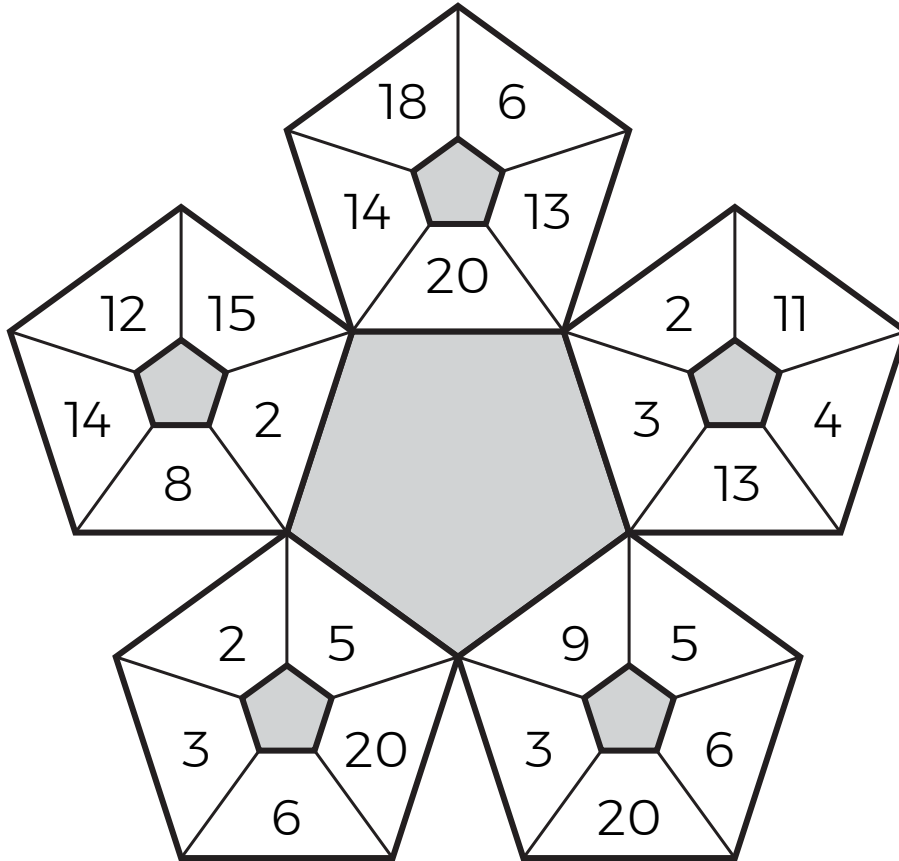
KAKOOMA

TANGY TUESDAY PUZZLE PACK
2.1.1


Name: _____

tangmath.com © 2017-18 Greg Tang

Puzzled? In each 5-number pentagon, find the number that is the sum of 2 other numbers.
Use all 5 sums to create 1 final addition puzzle and solve.



Final
answer:



EQUATO

TANGY TUESDAY PUZZLE PACK
2.1.1

Name: _____

tangmath.com © 2017-18 Greg Tang

Fill in the empty boxes to make every horizontal and vertical equation correct.
Read equations left to right and top to bottom. Use every number in the bank once.

1 2 3 4 5 6

9	-	5	=	8	-	
-		+		+		+
7	-	2	+		=	
+		-		-		-
3	=	4	-		+	1
=		=		=		=
	-		+	7	=	9